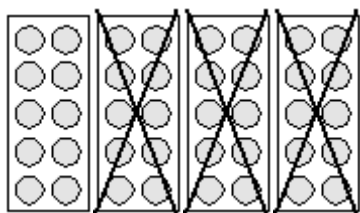
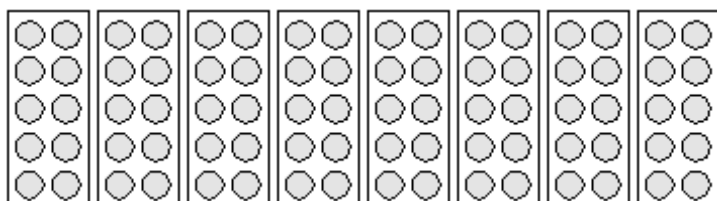


# Aftrekken



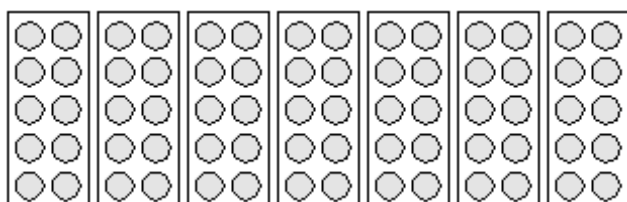
$$40 - 30 = \underline{\quad}$$

---



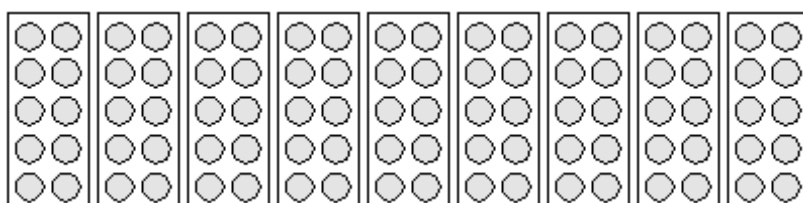
$$80 - 20 = \underline{\quad}$$

---



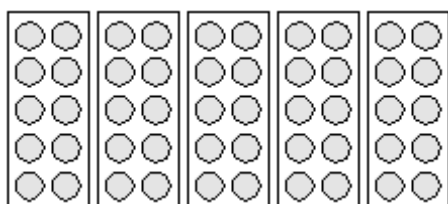
$$70 - 40 = \underline{\quad}$$

---



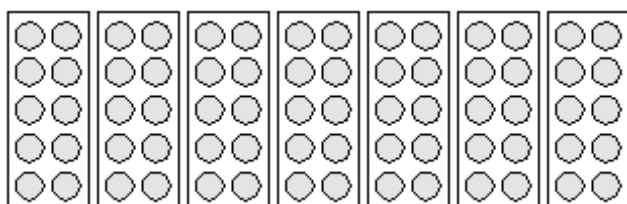
$$90 - 60 = \underline{\quad}$$

---



$$50 - 10 = \underline{\quad}$$

---



$$70 - 50 = \underline{\quad}$$