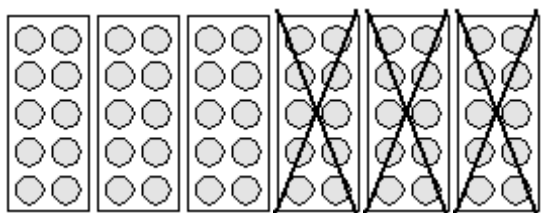
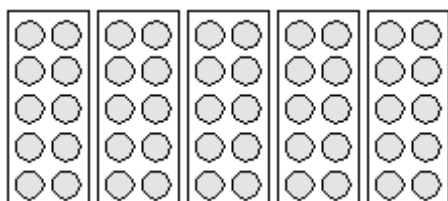


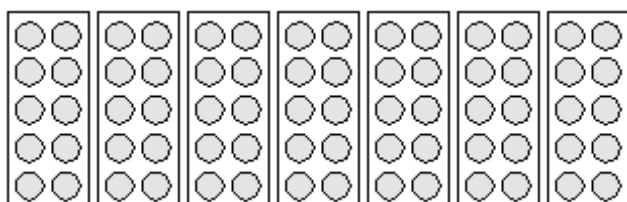
Aftrekken



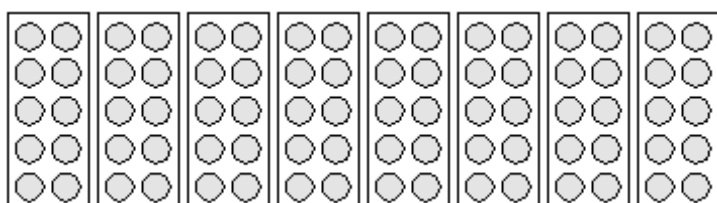
$$60 - 30 = \underline{30}$$



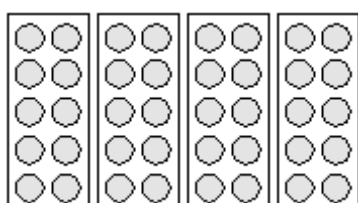
$$50 - 40 = \underline{\quad}$$



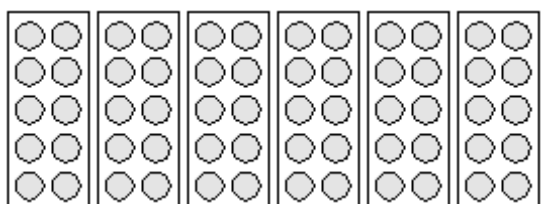
$$70 - 20 = \underline{\quad}$$



$$80 - 50 = \underline{\quad}$$



$$40 - 10 = \underline{\quad}$$



$$60 - 20 = \underline{\quad}$$