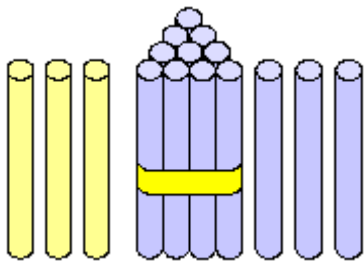
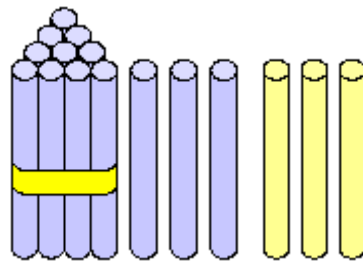


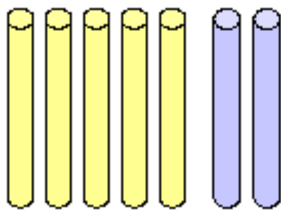
Draai de som om




$$3 + 13 = 16$$



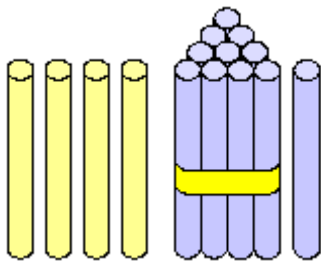
$$13 + 3 = 16$$



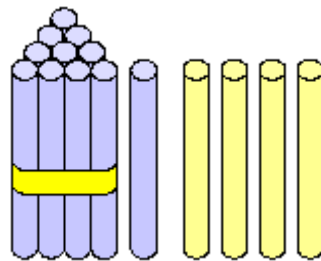
$$5 + 2 = \underline{\quad}$$



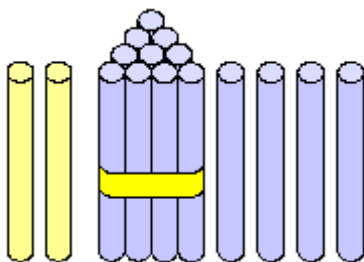
$$\underline{\quad}$$



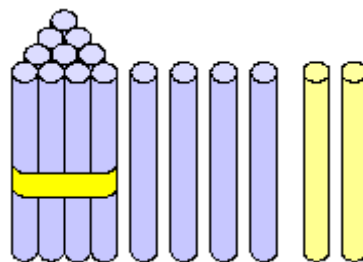
$$4 + 11 = \underline{\quad}$$



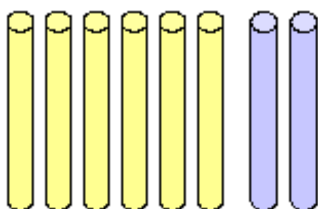
$$\underline{\quad}$$



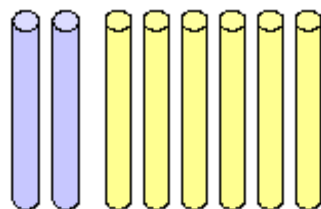
$$2 + 14 = \underline{\quad}$$



$$\underline{\quad}$$



$$6 + 2 = \underline{\quad}$$



$$\underline{\quad}$$