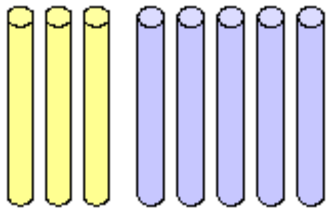
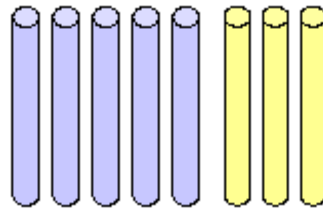


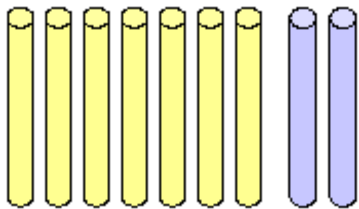
Draai de som om



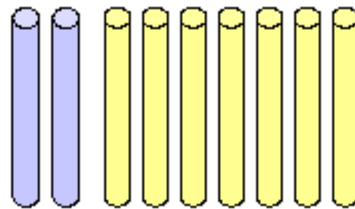
$$3 + 5 = \underline{8}$$



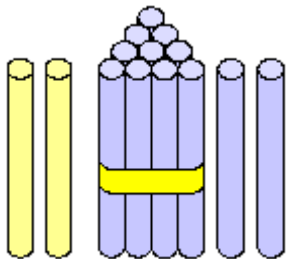
$$5 + 3 = \underline{\quad}$$



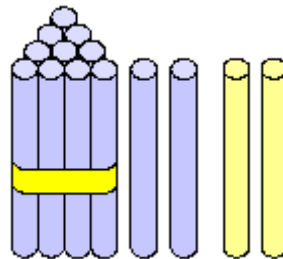
$$7 + 2 = \underline{\quad}$$



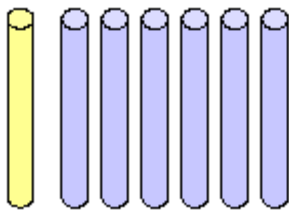
$$2 + 7 = \underline{\quad}$$




$$2 + 12 = \underline{\quad}$$



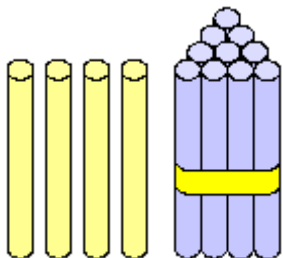
$$12 + 2 = \underline{\quad}$$



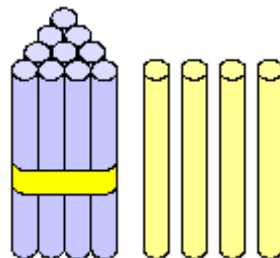
$$1 + 6 = \underline{\quad}$$



$$6 + 1 = \underline{\quad}$$



$$4 + 10 = \underline{\quad}$$



$$10 + 4 = \underline{\quad}$$